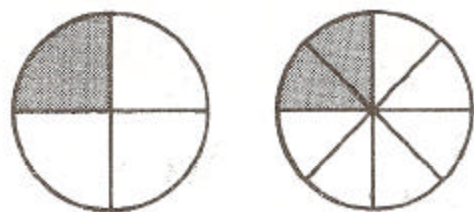


Equal Fractions


Write the fraction for the shaded part of each figure below.

Equal parts shaded.



$$\frac{1}{4} = \frac{2}{8}$$

Equal parts shaded.



=

Equal parts shaded.



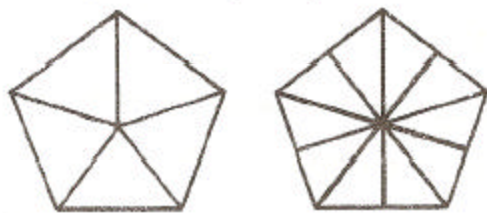
=

Equal parts shaded.



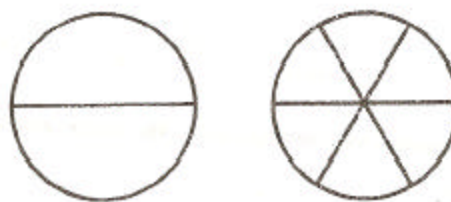
=

Shade equal parts.



=

Shade equal parts.



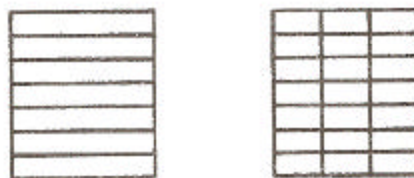
=

Shade equal parts.



=

Shade equal parts.



=